

FOREST BROOK
INTERNATIONAL SCHOOL, DESURI

SESSION 2026-27

- NATURE TRAIL
- SUMMER ADVENTURE
- CAMPING

**SUMMER
VACATION
ASSIGNMENT**

STUDENT'S NAME: _____

CLASS / SEC: _____

ROLL NO: _____

SUMMER VACATION NOTICE

HAPPY HOLIDAYS!

1.



HOLIDAYS HOMEWORK for all subjects should be done in a **SEPARATE NOTEBOOK** (Keep it neat and clean!)

2.



THE SCHOOL WILL REMAIN CLOSED on 15.05.26 and **SUMMER BREAK** will commence from 15.05.26 to 20.06.26

3.



THE SCHOOL WILL REOPEN on 21.06.26 as per usual time. (As per Govt. Order)



4.



ALL THE ASSIGNMENTS are to be submitted on 22.06.26.

5.



DAILY ONE PAGE HINDI & ENGLISH CURSIVE WRITING should be done in a **SEPARATE NOTEBOOK** (Practice beautifully!)



All About Me

- Hello everyone, my name's _____
- I'm _____ years old.
- My hometown is _____
- My birthday is on _____
- I'm a student at _____
- My favorite color is _____
- There are _____ people in my family.
- My father is a _____
- My mother is a _____
- In the future I want to be a _____
- My favorite sport is _____
- My hobbies are _____
- My favorite food is _____
- My favorite drink is _____
- My favorite book is _____
- My favorite movie is _____

Subject – E.V.S.

(Write and learn this work in e. v. s notebook)

I. Tick (✓) the correct option...

- (i) In a happy home, family members work ____
(a) Different (b) Together []
- (ii) Our family teaches us ____ things.
(a) Good (b) Bad []
- (iii) Earlier, children lived a very ____ life.
(a) Difficult (b) Simple []
- (iv) Now days, children do not spend much time with their ____
(a) Friends (b) Relatives []

II. Fill in the blanks:

[Different, Values, Joint, family]

- (i) As people grow, they look ____
(ii) God's greatest gift to us is ____
(iii) Rohan's father lived in a ____ family.
(iv) Rohan has learned a number of ____ from his elders.

III. Read the clues and find the word...

- (i) The female parent M ____ R.
(ii) The female sibling S ____ R.
(iii) Parent's father G ____ R.
(iv) Parent's mother G ____ R.

IV. Answer the following questions.

- (i) What is nuclear family?
(ii) What is joint family?
(iii) What type of family are you a part of?
(iv) What we learn from our family members?
(v) Name the first School of every child? ____
-

Subject – English

(Write and learn this work in English notebook)

Fill in the blanks-

- Q1. Toshiaki's mother was a _____
 - Q2. Toshiaki was brought up by his _____
 - Q3. The dragon was guarding a _____
 - Q4. What is pronoun?
 - Q5. Write types of pronoun.
 - Q6. Describe Toshiaki's good qualities.
 - Q7. Describe the dragon.
 - Q8. Why did then dragon leave the village?
 - Q9. Where did Toshiaki see his mother again?
 - Q 10. Write 10 word meanings of Chapter "The dragon Mother?"
-

Subject – Hindi

(Write and learn this work in Hindi Grammar notebook)

- 1..दो प्रार्थना पत्र
 - 2..तीन निबंध (दिवाली , होली, रक्षाबंधन)
 - 3..दो पत्र (बधाई पत्र और मोहल्ले मे सफाई हेतु)
 - 4.कोई दो कहानी किताब से
-

Subject – Computer

(Write and learn this work in Computer notebook)

Q.1 Tick (✓) the correct answer :

- a) Which option is used to change the name of a file or folder?
(i) Rename (ii) Shortcut (iii) Jump List (iv) Control Panel

b) The F1 key is used to open the _____ window.

- (i) Panel (ii) Shortcut (iii) Recycle Bin (iv) Taskbar

c) 8 bits are equal to _____.

- (i) 1 byte (ii) 1 gigabyte (iii) 1 terabyte (iv) 1 megabyte

d) _____ is a volatile memory.

- (i) Primary Memory (ii) ROM (iii) RAM (iv) Secondary Memory

e) A touchpad has _____ buttons.

- (i) two (ii) three (iii) four (iv) five

Q.2 Write the two types of main memory and give four points each.

Q.3 Write the types of memory.

Q.4 Classify the input and output devices :

[Microphone, Light pen, Scanner, Webcam, Speaker, Touchpad, Joystick, Plotter]

Input Devices

1. _____
2. _____
3. _____
4. _____






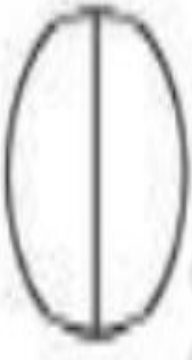
Output Devices

1. _____
2. _____
3. _____
4. _____


Q.5 Answer the following questions:

- a) Explain the different types of scanners.
- b) Explain the difference between RAM and ROM.
- c) Define the term "file".
- d) What is the purpose of Control Panel?
- e) What is a joystick?

4. Colour the shapes as given in the box :

 Color $\frac{2}{4}$	 Color $\frac{3}{4}$
 Color $\frac{2}{3}$	 Color $\frac{4}{5}$
 Color $\frac{3}{5}$	 Color $\frac{1}{2}$

Ascending And Descending Order



These worksheets for Class 4 Maths, CBSE / NCERT / SCERT will improve your subject concept and improve your grades.

Which is Smaller?

Identify and use the smaller or greater than symbol for your answer:

mm

110

>

cm

4

455

3

624

1

534

6

634

9

617

8

mm

110

cm

4

455

3

624

1

534

6

634

9

617

8

Convert the km into metre.

km

1

metre

1000

2

3

4

km

4.5

metre

5

5.2

8

What is the fraction of the shaded part?



$\frac{1}{4}$



—



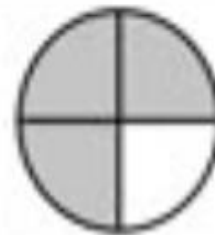
—



—



—



—




—



—



—



—

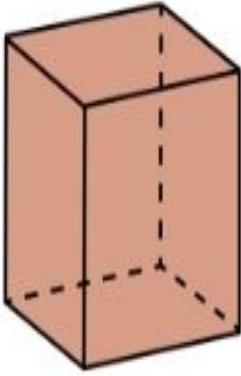


Place Value

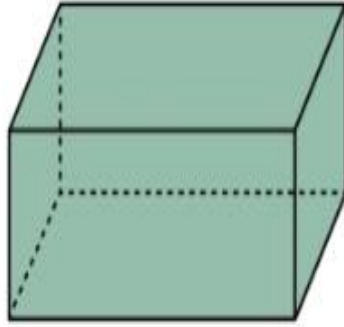
Directions: following the example, write the expanded form of the following numbers.

21214	$20000 + 1000 + 200 + 10 + 4$
57323	
67529	
72349	
98324	
23802	
42992	
52392	
86490	

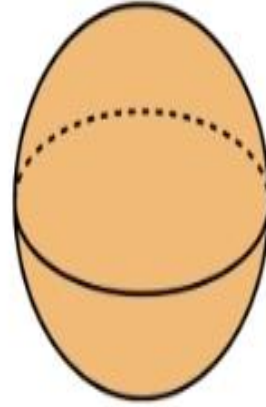
3D SHAPES



Cube



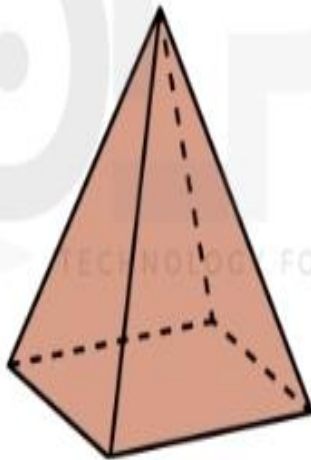
Rectangular
Prsim




Sphere



Cylinder



Pyramid



Cone



